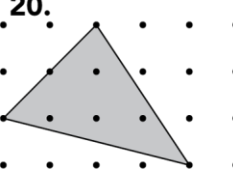
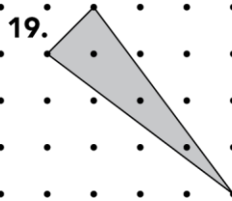
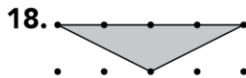
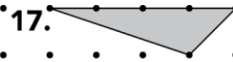
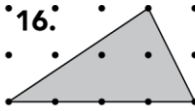
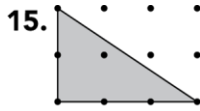


Labsheet 1ACE

Exercises 15–25. Also do 37-38 on page 18-19 in the book.

Find the area of each triangle. If necessary, copy the triangles onto dot paper.



Find the area of each figure. Describe the method you use. If necessary, copy the figures onto dot paper.

